

COMPLETA CON I NUMERI CHE MANCANO PER FORMARE 10

$3 \text{ e } \square = 10$

$\square \text{ e } 6 = 10$

$9 \text{ e } \square = 10$

$2 \text{ e } \square = 10$

$\square \text{ e } 5 = 10$

$\square \text{ e } 7 = 10$

$\square \text{ e } 1 = 10$

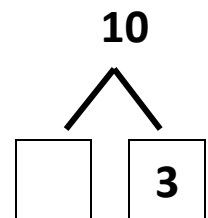
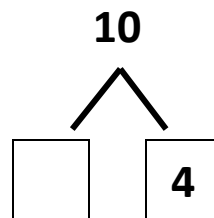
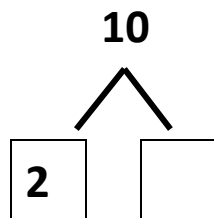
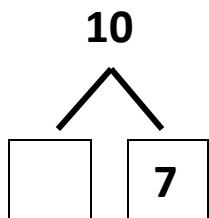
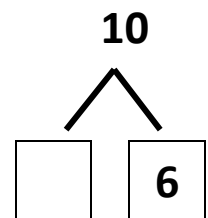
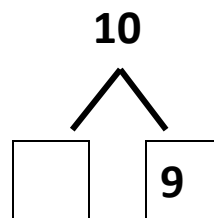
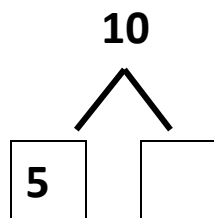
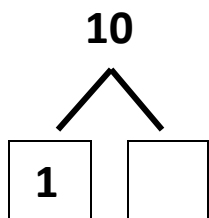
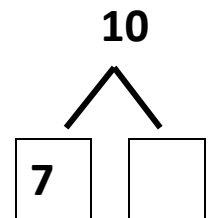
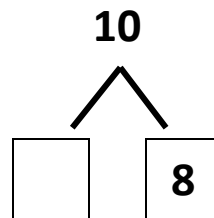
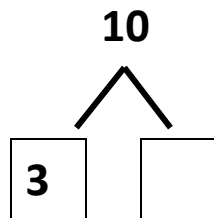
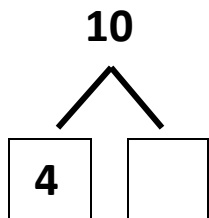
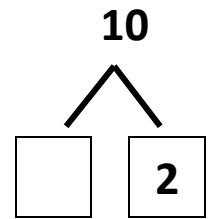
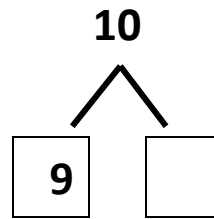
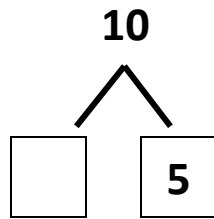
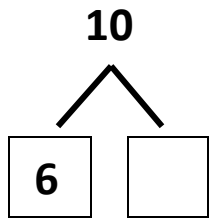
$\square \text{ e } 8 = 10$

$4 \text{ e } \square = 10$

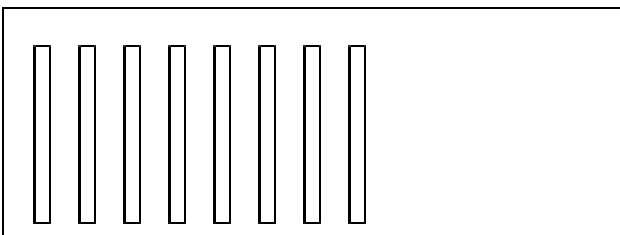
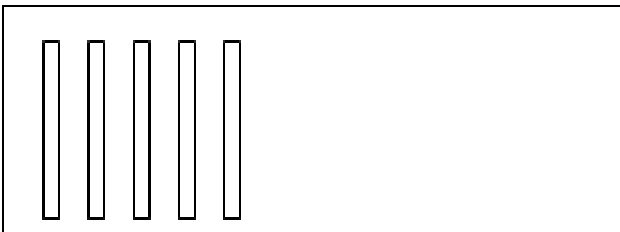
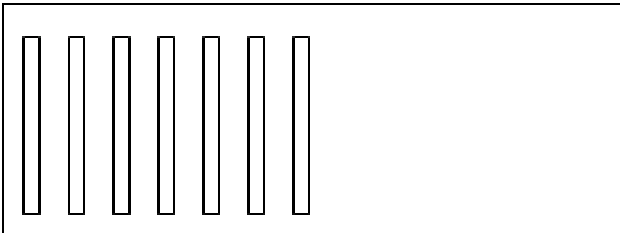

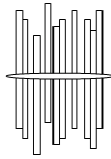
$\square \text{ e } 2 = 10$

$6 \text{ e } \square = 10$

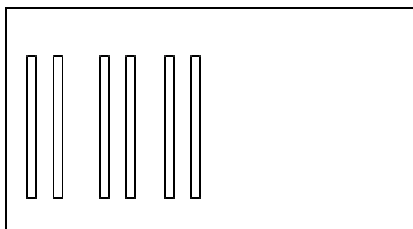
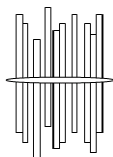
SCRIVI IL NUMERO COMPLEMENTARE PER FORMARE 10



**COMPLETA CON LE CANNUCCE CHE MANCANO PER FORMARE  
IL FASCETTO DA 10**



DISEGNA NEI QUADRATI VUOTI LE CANNUCCE CHE MANCANO PER FORMARE IL FASCETTO DA 10

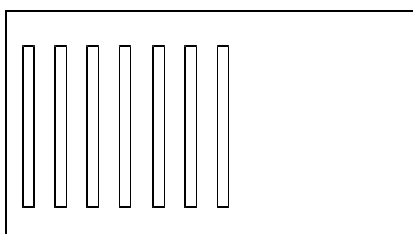


e



fa

10



e

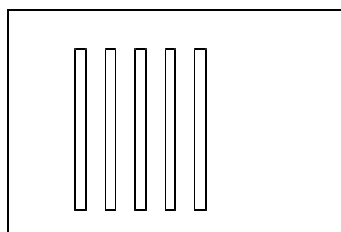


fa

10

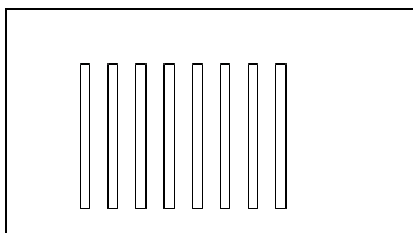


e



fa

10




e

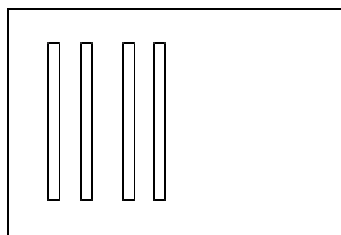


fa

10



e



fa

10