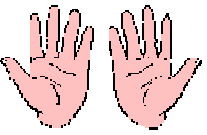











CONTA E COMPLETA LE OPERAZIONI




esempio




	
$10 + 3 = 13$	





		
$5 + 2 + 1 = \dots$		





		
$3 + 5 + 2 = \dots$		




	
$1 + 5 = \dots$	





		
$5 + 2 + 5 = \dots$		

		
$4 + 5 + 2 = \dots$		

			
$5 + 2 + 5 + 2 = \dots$			

			
$5 + 3 + 5 + 2 = \dots$			

		
$5 + 5 + 5 = \dots$		

			
$5 + 5 + 5 + 2 = \dots$			